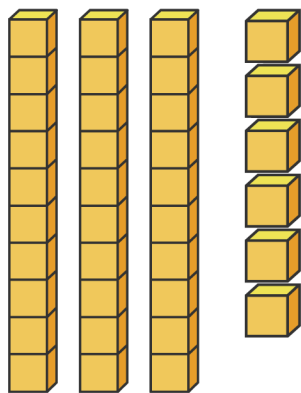
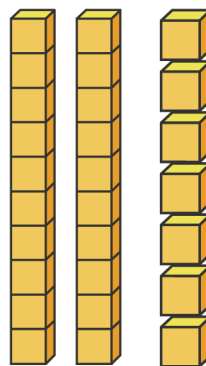


# How Many More to Get to a Ten?

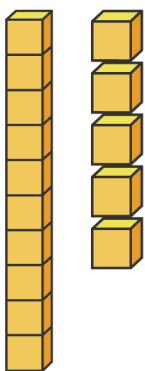
**Directions:** Write the number represented by the place value blocks. Then draw how many more ones are needed to get to the next ten.



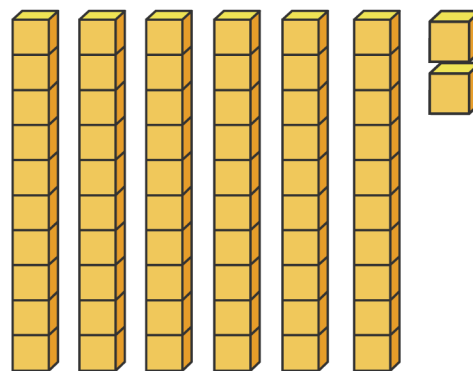
30		40
----	--	----



20		30
----	--	----



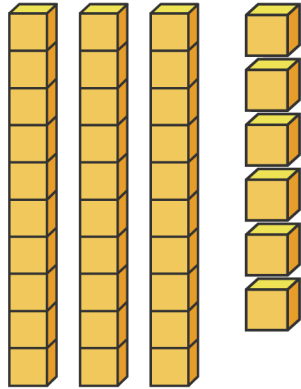
10		20
----	--	----



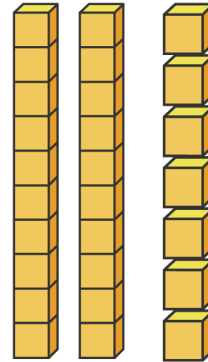
60		70
----	--	----

# How Many More to Get to a Ten?

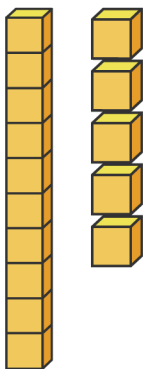
**Directions:** Write the number represented by the place value blocks. Then draw how many more ones are needed to get to the next ten.



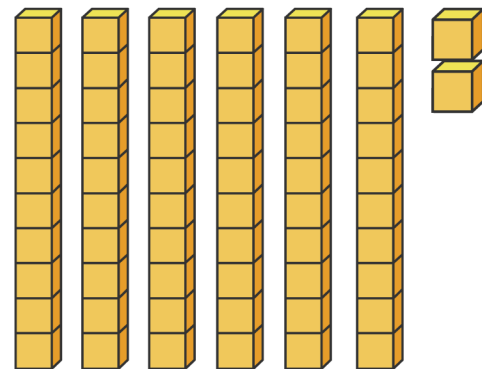
30	36	40
----	----	----



20	27	30
----	----	----



10	15	20
----	----	----



60	62	70
----	----	----