



Kickstart



Corner October

Name: _____


Date: ____/____/____

#1

Write the Word Form - 37


#2

Circle the symmetrical candies.




#3

Find the sum.



#4

What value is shown?



#5

Draw a four sided quadrilateral.



Complete the fall leaf patterns.



Day
2

Kickstart



Corner October

Name: _____

Date: ____/____/____

#1


Fill in the missing numbers.

	35	
--	----	--

	123	
--	-----	--

#2

What time is it?



__ : __

#3

Write a number less than



#4

Which weighs more?



or



#5

Count the sum of the coins.



Break the candy into four equal groups.



Day
3

Kickstart



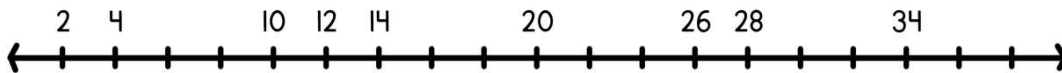
Corner October

Name: _____

Date: ____/____/____


#1

Fill in the missing numbers.



#2

Make twenty! Fill in the missing fact.



#3

Write standard form.

Three hundred and six

#4

Count the tallies.



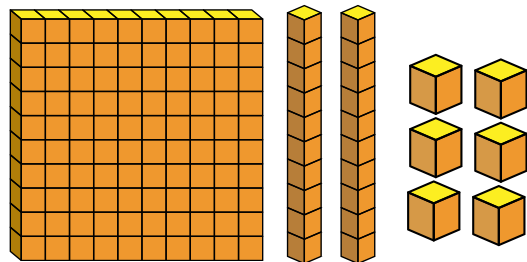
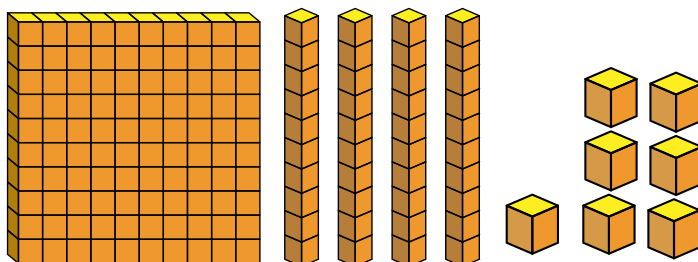
#5

Write $<$, $>$, or $=$

46  64

Circle two ways that show 147

$$100 + 20 + 20 + 7$$



$$100 + 40 + 6$$

Day
4

Kickstart



Corner October

Name: _____

Date: ____/____/____

#1

How many months are in a year?

#2

Color 2/3 of the hats.




#3

Find the sum.

$$5 + 4 =$$
$$50 + 40 =$$
$$500 + 400 =$$

#4

Which object is most like a cube?



#5

Draw coins to show \$3.27

Draw the information on a graph.

CANDY BY COLOR

Number of Skittles

Y	B	O	G

- 3 yellow candies
- 1 blue candies
- 1 orange candies
- 2 green candies



Day
5

Kickstart




Corner October

Name: _____

Date: ____/____/____

#1

Continue the pattern.



#2

Circle the correct unit of measure.



inches
feet
miles

#3

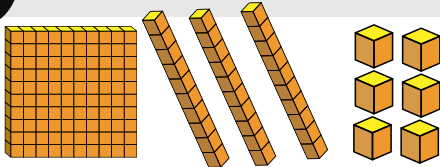
Write the expanded form.

86

____ + ____

#4

What value is shown?



#5

Subtract.

$$80 - 16 =$$

$$40 - 4 =$$

Practice a released test question!

Which of the following shapes has been divided into equal parts?

