

Name: _____


Introduction to Multiplication

Directions: Let's match the arrays! In the box below, write the letter of the array that matches each equation. Then see if you can solve the equations!

A




B




C



D



E



F



$6 \times 2 =$

$4 \times 4 =$

$7 \times 1 =$

$2 \times 5 =$

$5 \times 7 =$

$3 \times 4 =$



KEY

Name: _____

Introduction to Multiplication

Directions: Let's match the arrays! In the box below, write the letter of the array that matches each equation. Then see if you can solve the equations!


A




B




C



D



E



F

F	$6 \times 2 =$
B	$4 \times 4 =$
C	$7 \times 1 =$
A	$2 \times 5 =$
D	$5 \times 7 =$
E	$3 \times 4 =$

