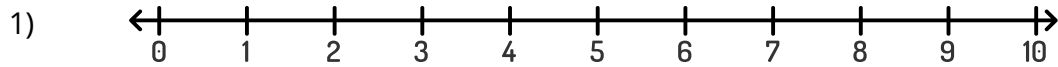


Name: \_\_\_\_\_

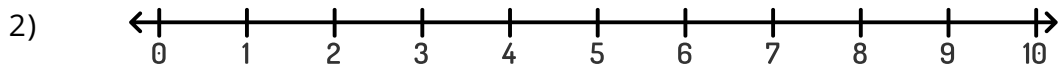
# Add with Number Lines

## Numbers 1-10

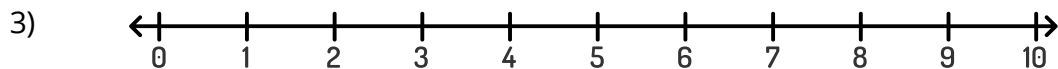
Draw the addition hops on the number line to find the sum.



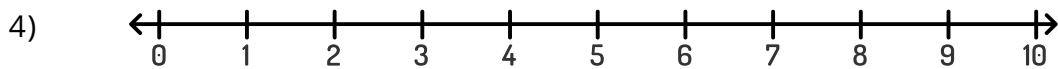
$$7 + 3 = \underline{\hspace{2cm}}$$



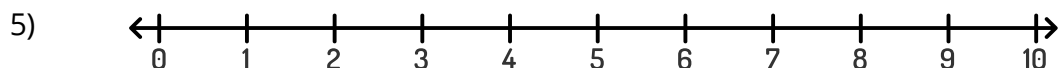
$$2 + 2 = \underline{\hspace{2cm}}$$



$$0 + 6 = \underline{\hspace{2cm}}$$



$$4 + 2 = \underline{\hspace{2cm}}$$



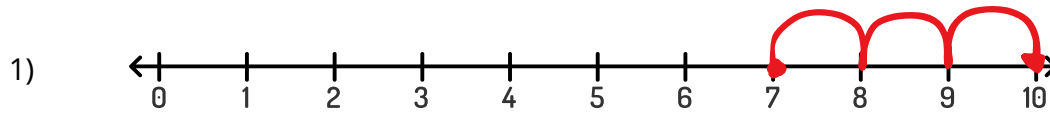
$$3 + 5 = \underline{\hspace{2cm}}$$

Name: \_\_\_\_\_

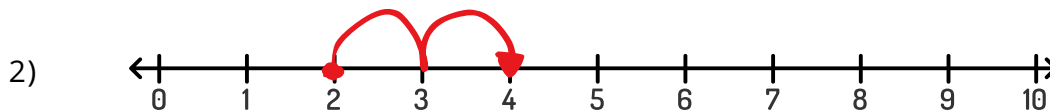
# Add with Number Lines

## Numbers 1-10

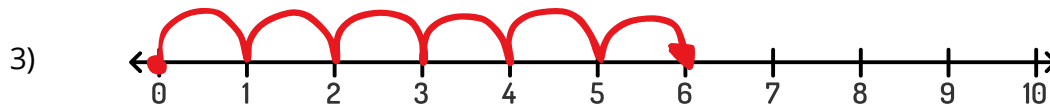
Draw the addition hops on the number line to find the sum.



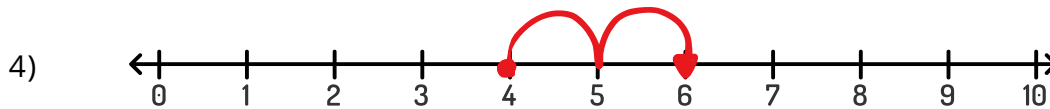
$$7 + 3 = \underline{10}$$



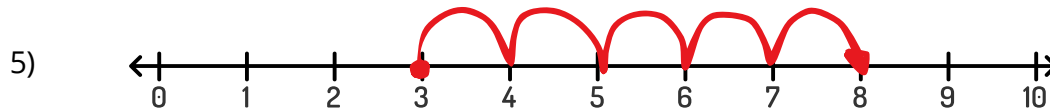
$$2 + 2 = \underline{4}$$



$$0 + 6 = \underline{6}$$



$$4 + 2 = \underline{6}$$



$$3 + 5 = \underline{8}$$