


Name: _____

Subtract to 10


Count the circles and cross out them out to find a difference of 10.

1)




$$20 - \underline{\quad} = 10$$

2)




$$17 - \underline{\quad} = 10$$

3)




$$14 - \underline{\quad} = 10$$

4)



$$19 - \underline{\quad} = 10$$

5)




$$12 - \underline{\quad} = 10$$

Name: _____

Subtract to 10


Count the circles and cross out them out to find a difference of 10.

1)



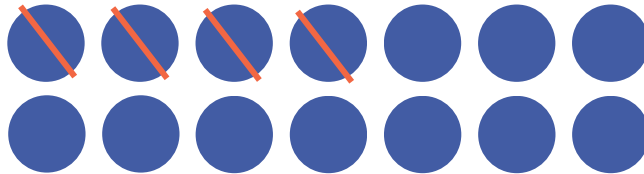
$$20 - \underline{10} = 10$$

2)




$$17 - \underline{7} = 10$$

3)




$$14 - \underline{4} = 10$$

4)



$$19 - \underline{9} = 10$$

5)



$$12 - \underline{2} = 10$$