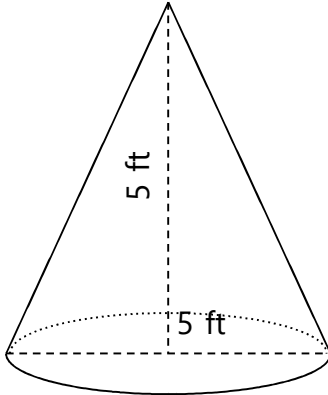


Name: _____

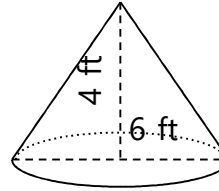
Volume of Cones

Find the volume.

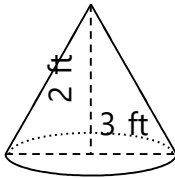
1)



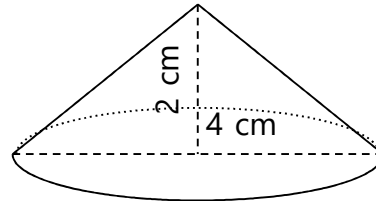
2)



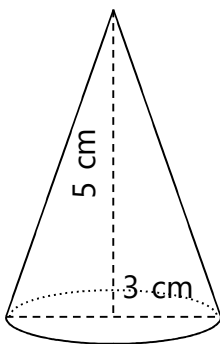
3)



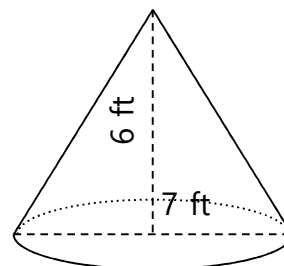
4)



5)



6)

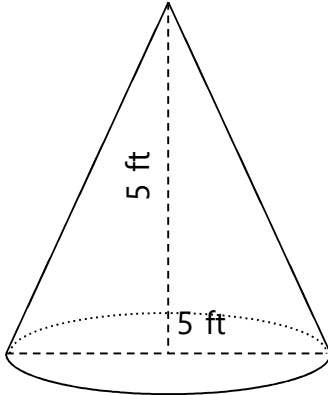


Name: _____

Volume of Cones

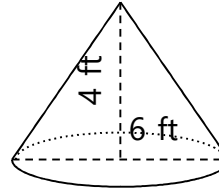
Find the volume.

1)



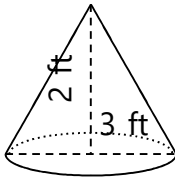
$$V = 33 \text{ ft}^3$$

2)



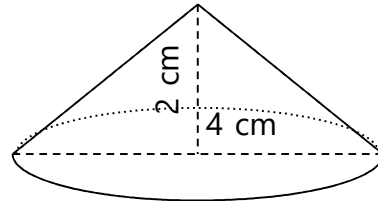
$$V = 38 \text{ ft}^3$$

3)



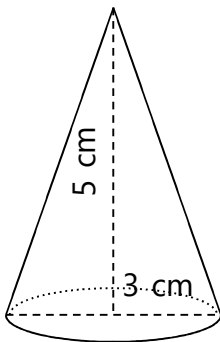
$$V = 5 \text{ ft}^3$$

4)



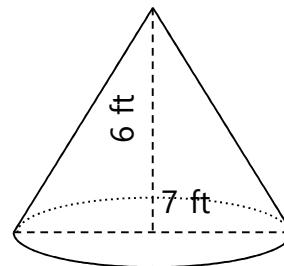
$$V = 8 \text{ cm}^3$$

5)



$$V = 12 \text{ cm}^3$$

6)



$$V = 77 \text{ ft}^3$$