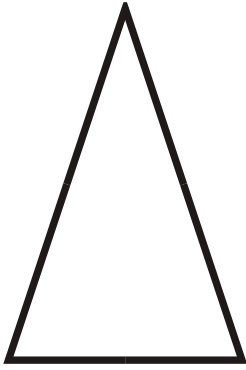


Name: _____

Identify Triangles

Identify each triangle as an equilateral, scalene, isosceles, or right triangle.

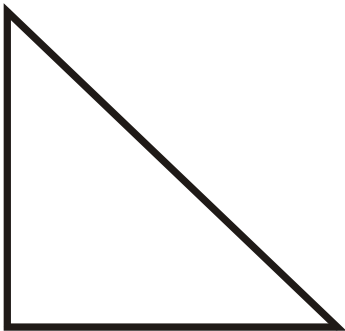
1)




2)




3)



4)



5)



6)

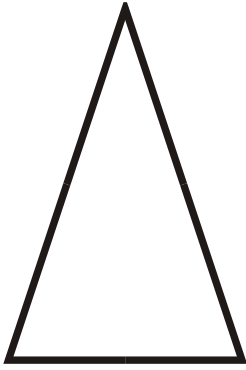


Name: _____

Identify Triangles

Identify each triangle as an equilateral, scalene, isosceles, or right triangle.

1)



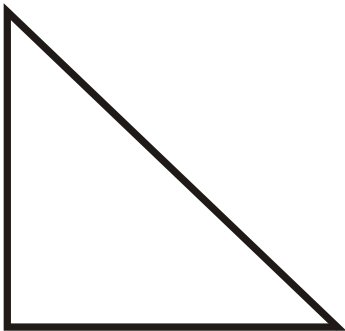
Isosceles Triangle

2)




Scalene Triangle

3)




Right Triangle

4)



Equilateral Triangle

5)



Isosceles Triangle

6)



Scalene Triangle