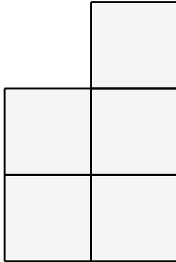


Name: _____

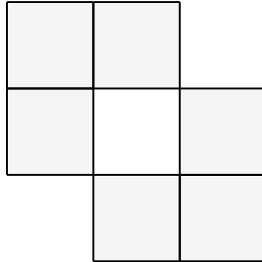
Area in Square Units

Find the area of each shape. Each square is 1 inch.

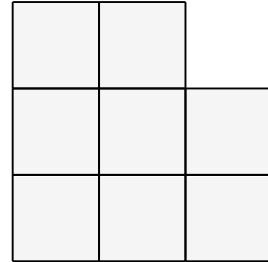
1)



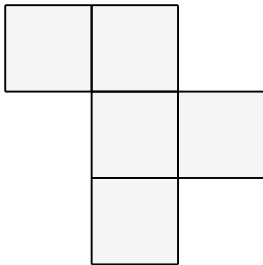
2)



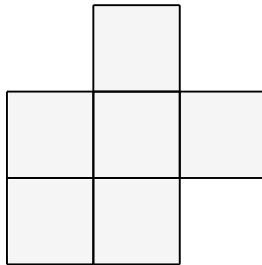
3)



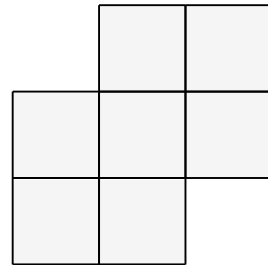
4)



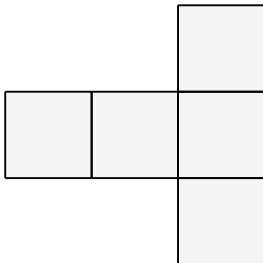
5)



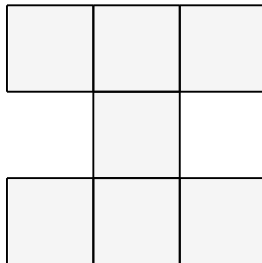
6)



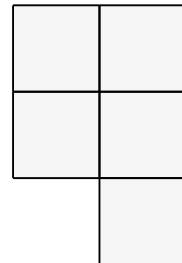
7)



8)



9)

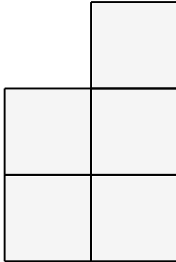


Name: _____

Area in Square Units

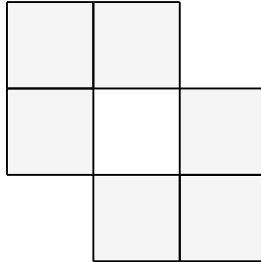
Find the area of each shape. Each square is 1 inch.

1)



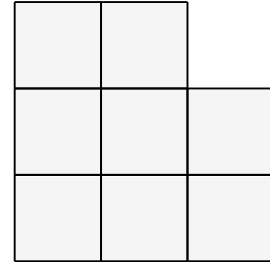
$A = 5 \text{ in}^2$

2)



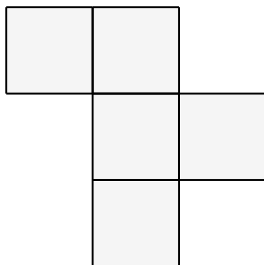
$A = 6 \text{ in}^2$

3)



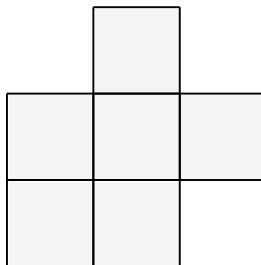
$A = 8 \text{ in}^2$

4)



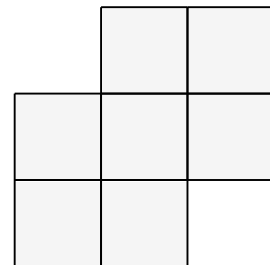
$A = 5 \text{ in}^2$

5)



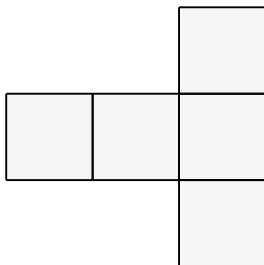
$A = 6 \text{ in}^2$

6)



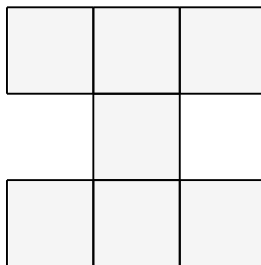
$A = 7 \text{ in}^2$

7)



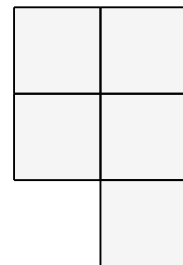
$A = 5 \text{ in}^2$

8)



$A = 7 \text{ in}^2$

9)



$A = 5 \text{ in}^2$