





Use Addition to Make 5





$$4 \text{ bees} + 1 \text{ bees} = 5 \text{ bees}$$





$$2 \text{ bees} + 3 \text{ bees} = 5 \text{ bees}$$

Show different ways to make 5

Use Addition to Make 5 AnswerKey



$$4 \text{ bees} + 1 \text{ bees} = 5 \text{ bees}$$



$$2 \text{ bees} + 3 \text{ bees} = 5 \text{ bees}$$

Show different ways to make 5

$$4+1=5$$

$$2+3=5$$

$$1+4=5$$

$$3+2=5$$